


St Peter at Gowts Church



Maths Trail

Name: _____

Date: _____

Church Plan

Question Time

INSTRUCTIONS:

The answers to all of these questions can be found inside the church building.

You will need to look for patterns and pictures, for numbers and shapes, dates, lists and even paintings and sculpture.

There will be times when you might have to use some maths you know or when you have to work things out for yourself or perhaps draw a picture or a graph!

Remember there will be things to look at in church that you might have never seen before or never even realised that it was there!

Use the plan of the church to find your way around; there are some questions that can only be answered in certain places.

Don't get lost!

Have fun and see what you can find out:

MATHS IS EVERYWHERE, ALL AROUND YOU, ALL THE TIME!

Good Luck!

Mr Watson

THE NAVE:

Approximately how many chairs would you need to seat the same number of people that can sit in the pews?

Can you find Catherine Matthews memorial?

How old was she when she died? _____

How many 'Stone' steps can you find? _____

Where can you find St George and the Dragon?



Find The Roll of Honour:


How many people from the parish of St Peter's Church died in the 1914-1919 war?


Create a tally chart:

Count up the number of people for each different Christian name.

Which name was the most common?

How many different names were used?







How many sides does a cross like this have? _____

How many 'metal' crosses can you find? _____

How many sides is this in total? _____

The Rood Cross:



How many gold flower bosses are on the cross? _____

Write a multiplication calculation which links this number to the cross.

Pace the length and width of the Nave - now estimate its area

Are there more organ pipes than candle sticks? _____

How many of each can you find?

Find this image:



How many arches are on the font? _____

How many arches are in the Nave? _____

Which has the most arches and by how many?

Now search carefully for this pattern:

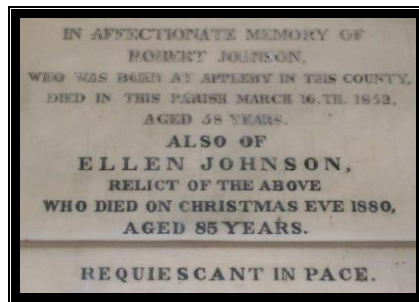


How many of them are there? _____

How many tiles are on this wall altogether? _____

THE SOUTH AISLE:

Find this memorial:



In what years were Robert and Ellen Johnson born?

THE CHAPEL:

Find this picture:



What is the square of the sum of the 3 numbers? _____

Can you make "20" by using all 3 of the numbers? (once each)

What about making "2" by using all 3 of the numbers? (once each)

How many circles can you count in the 9 windows of the chapel?

Now write this as a ratio of circles to windows

THE CHOIR:

How many wooden flowers in The Choir? _____

THE SANCTUARY:

Look at the roof.

How many shields are there?

Show how you worked it out (CLUE: Don't just count them!)

Find this plaque:



Can you work out the year in roman numerals?

MDCCCLXXXVII

THE ALTAR:

Find St Hugh:




If every apostle has two eyes and ten fingers - how many fingers and eyes are there in total?

How many keys can you count on the Reredos? _____

CHALLENGE:



Can you find the eight stone faces?
Where are they?



Well that's it!

Congratulations

You have completed the trail, who would have thought there would be all this maths in church?

And these were just some of the questions I wrote!

I hope you enjoyed it!

Mr Watson